

**MALAPPURAM SAHODAYA APTITUDE TEST
EXAMINATION 2016-17**

Class: 1

Date:

Marks : 60

Reg. No.

Time : 2 Hrs

General Instructions:

1. Candidate will be supplied with separate Question Paper and Answer Sheet.
2. Answer the questions in the OMR sheet by shading the appropriate bubble.
3. Shade the bubbles with black ball pen/HB pencil.
4. Each question carries one mark.
5. For each question below, four options are given. One of them is correct answer. Make your choice and shade the correct box.

1. Fill in the blank with a suitable word.



This basket is

- | | | | |
|----------|---------|--------|---------|
| a) Empty | b) Full | c) Raw | D) Ripe |
|----------|---------|--------|---------|
2. The dog ran the road.
- | | | | |
|----------|----------|---------|------------|
| a) About | b) Along | c) With | D) Between |
|----------|----------|---------|------------|
3. Which one is not a rhyming word
- | | | | |
|--------|---------|---------|---------|
| a)Nose | b) Rose | c) Toes | d) Cows |
|--------|---------|---------|---------|
4. The crow in the sky.
- | | | | |
|---------|----------|-----------|----------|
| a) Runs | b) Flies | c) Stands | d) Hangs |
|---------|----------|-----------|----------|
5. The baby of a cow is called.....
- | | | | |
|--------|-----------|---------|---------|
| a) Cub | b) Kitten | c) Calf | d) Foal |
|--------|-----------|---------|---------|
6. Find the adjective in the sentence. The round box given to him
- | | | | |
|----------|--------|--------|-------|
| a) Round | b) Box | c) Was | d)Him |
|----------|--------|--------|-------|

Read the following passage and answer the questions that follow.

There was a little girl called Ahana. She loved to read. She used clues to help her read. Whenever she read something, she first looked at the pictures in the book, she then read the title on the page. This is how she got a better idea about what she read. She used to make picture of what she read, in her mind.

7. Ahana loved
- | | | | |
|-----------|-------------|------------|------------|
| a)to read | b) to dance | c) to sing | d) to help |
|-----------|-------------|------------|------------|
8. What did Ahana do first?
- | | |
|---------------------|------------------------------|
| a) Read the moral | b) Read the end of the story |
| c) See the pictures | d) Called a girl |

9. How did she know what the book or the passage was about?
 a) Reading the moral b) by making pictures c) reading the title d) using clues.
10. What did she do as she read
 a) Made pictures in her mind about what she read b) drew on paper what she read
 c) Write the moral d) Drawing pictures
11. Odd one out
 a) Brick b) Cement c) Gold d) Stone
12. In the..... season the days are hot and dry.
 a) Winter b) Spring c) Summer d) Rainy
13.has six legs
 a) Octopus b) Giraffe c) Owl d) Butterfly
14. Which is the animal that lives on land and in water?
 a) Octopus b) Camel c) Squirrel d) Pigeon
15. While crossing the road we must use the
 a) Zebra crossing b) Subways c) Foot path d) National Highway
16. What is the name of the house made from blocks of snow or ice.
 a) Tent b) Caravan c) Houseboat d) Igloo
17. Rainy season is also called.....
 a) Winter b) Monsoon c) Summer d) Spring
18. A small waterbody is called a.....
 a) Lake b) Pond c) River d) Well
19. Which of the following statement is INCORRECT?
 a) We cannot feel air but we can see it b) Moving air is called wind
 c) Air takes up space d) All of these
20. My father sells flowers and bouquets. He is a
 a) Grocer b) Gardner c) Milkman d) Florist
21. John has 3 bags of oranges. There are 6 oranges in each bag. How many oranges does he have in all?



a)25



b) 18




c)8

d)3

22. Rahul has   which of the following he can buy?



23. Count the number of circles in the following figure?





- a) 9 b) 8 c) 11 d) 3

24. Given two baskets show the number of apples.

Basket 'X'

Basket 'Y'



Which of the following statements is correct?

- a) Basket X has two more apples than Basket Y
 b) Basket Y has more apples than Basket X
 c) Basket Y has one apple less than Basket X
 d) Both basket X and Y have equal apples

25. Which of these number sentences gives 42 as the answer?

- a) $98-56$ b) $99-42$ c) $84-40$ d) $82-30$

26.

Favourite Fruits	Orange	Apple	Strawberry	Guava
No. of Children	28	21	29	19

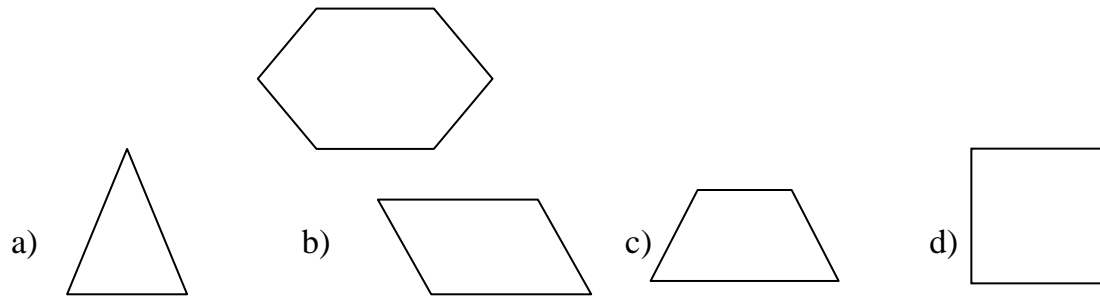
Which is the most favourite fruit?

- a) Guava b) Strawberry c) Apple d) Orange

27. Rohan has 8 pencils. Megha has 9 pencil more than Rohan, How many pencils does Megha has?

- a) 17 b) 9 c) 15 d) 16

28. The given shape can be made by using two of which shapes?



29. Migual wirtes a two-digit number. His number has 9 tens and 4 ones. Which is Migual's Number?

- a) 49 b) 904 c) 94 d) 914

30. Which shows how to compare 54 and 45?

- a) $54 = 45$ b) $54 > 45$ c) $54 < 45$ d) $54 = 45 + 5$

31. Among the following who is the Chief Minister of Kerala?



a) Pinarayi Vijayan



b) V.S. Achudananadhan



c) Ooman Chandy



d) Ramesh Chennithala

32. is the capital of India

- a) New Delhi b) Thiruvananthapuram c) Mumbai d) Kolkatta

33. Where is heart located inside our body?

- a) Chest b) Lower back c) Head d) Legs

34. The brand Rolex is associated with which of the following?

- a) Watches b) Food c) Music d) Computer

35. Name of the smallest planet in our solar system?

- a) Venus b) Earth c) Saturn d) Mercury

36. Which of these companies does not makes a mobile phone?

- a) Apple b) Nokia c) Samsung d) Nissan

37. Which country has the highest population in the world?
 a) Australia b) India c) USA d) China
38. Which language is spoken in Pakistan?
 a) Hindi b) Arabic c) Urdu d) English
39. Periyar Sanctuary is situated in which State?
 a) Kerala b) Madhaya Pradesh c) Bihar d) Uttar Pradesh
40. We Celebrate the earth day on.....
 a) 22 March b) 22 April c) 22 May d) 22 January
41. What is our National Emblem?
 a) Tiger b) Peacock c) Lotus d) Ashok Chakra
42. Number of Players in Basket ball is.....
 a) 5 b) 6 c) 7 d) 8
43. Who is the present President of India?



a) Narendramodi



b) Dr.manmohan Singh



c) Pranab Mukarjee



d) L.K.Advani

44. Which is the first e-literate district in India?
 a) Malappuram b) Kasargode c) Kozhikkode d) Palakkad
45. Which is the fastest land animal in the world?
 a) Tiger b) Elephant c) Horse d) Cheetah
46. John made the number pattern below.
 3, 7, 11,,, 23, 27 what two numbers are missing from the pattern?
 a) 19, 15 b) 15,19 c) 14, 19 d) 15,18
47. If tomorrow is Sunday. Then what was the day before yesterday?
 a) Friday b) Thursday c) Wednesday d) Monday
48. Look at the picture given below



Which of the following numbers sentences represent the above picture?

- a) $2+2+2+2$ b) $2+2+2$ c) $2+2+4+4$ d) $2+2-2+2$

49. Find the odd one out from the given set of words
East, west, north, both, south
a) West b) East c) Both d) South
50. 'Soldier' is related to 'Army' in the same way as 'student' is related to.....
a) Education b) Class c) Teacher d) Student
51. From the letters given below, which is the 8th letter from your right?
P, A, C, Q, D, F, R, V, W, T, B, Z, F
a)F b) V c) R d) W
52. EIGHTY : IEHGYT : : OUTPUT :
a) UOTPTU b) OUPPTU c) UOPUTT d) UOPTTU
53. What should come in the place of question mark?
77, 74, 71, ?
a) 69 b) 68 c) 67 d)66
54. If BAT is coded as 283, CAT is coded as 383 and ARE is coded as 801, then the code for BETTER is.....
a) 213310 b)213301 c)123301 d)012334
55. Nasreena is taller than Pusppha but not as tall as Monish. Who among then is the tallest?
a) Nasreena b) Pushpa c) Pushpa & Monish d) Monish
56. Monitor look like a
A) Television b) Tree c) Table d)Door
57. Is used for listening to the sound of music
a) Printer b) Joystick c) Speaker d) Mouse
58. The Keyboard has enter key
a)1 b) 2 c) 3 d)4
59. The computer works.....than us
a) Faster b)Slow c)Equal d) None of these
60.key is the longest key on the keyboard
a) Enter b) Shift c) Delete d) Spacebar