

**MALAPPURAM SAHODAYA APTITUDE TEST
EXAMINATION 2016-17**

Class: 3

Date:

Marks : 60

Reg. No.

Time : 2 Hrs

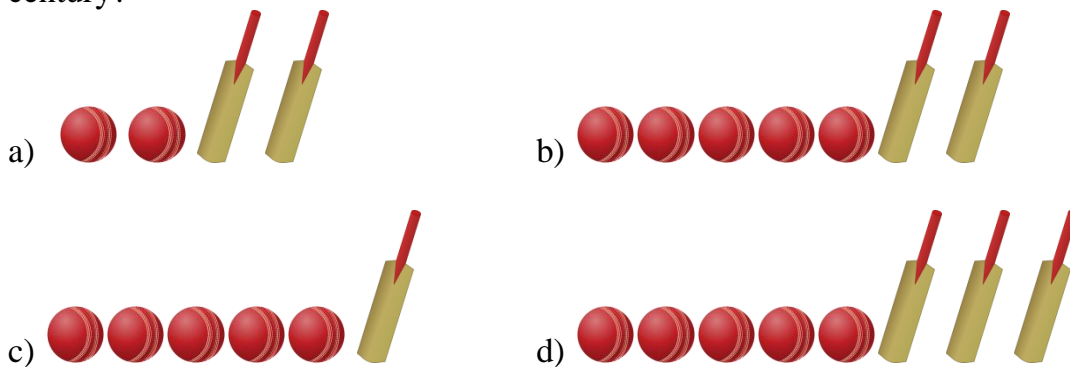
General Instructions:

1. Candidate will be supplied with separate Question Paper and Answer Sheet.
2. Answer the questions in the OMR sheet by shading the appropriate bubble.
3. Shade the bubbles with black ball pen/HB pencil.
4. Each question carries one mark.
5. For each question below, four options are given. One of them is correct answer. Make your choice and shade the correct box.

1. Braille script is related with.....
a) Dumb b) Deaf c) Lame d) Blind
2. The animal that can crawl
a) Dog b) Dove c) Rabbit d) Lizard
3. Goat bleats, Wolf.....
a) Moos b) Howls c) Mews d) Roars
4. Pen : ink : : pencil :
a) Knif b) Write c) Lead d) Chalk
5. It was sports meet in Rithu's School. His mother is District collector in Uttar Pradesh. She came for watching his programmes by.....
a) Boat b) Train c) Motorcycle d) Horse cart
6. A bird which can rotate its neck backwards to a large extend.
a) Peacock b) Mynah c) Sparrow d) Owl
7. is an activity which we can do using water
a) To knead dough b) To sing c) To run a fan d) To eat watermelon
8. is an insect that can eat wood
a) Termite b) House fly c) Mosquito d) Honey bee
9. Select form the following activity, which needs more water.
a) Swallowing tablet b) Watering the field c) Drinking d) Bathing
10. Steam is the form of water.
a) Solid b) Liquid c) hail d) Gaseous
11. It rained 6 days in September, 8 days in October and 3 days in November. How many days did not rain during those 3 months?
a) 76 b) 74 c) 73 d) 75
12. Century + 1 ½ century =
a) 200 b) 150 c) 300 d) 250

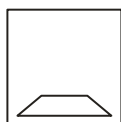
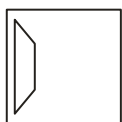
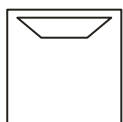
13. How many corners does a circle have?
 a) 0 b) 1 c) 3 d) 4
14. Sum of two numbers is 89. If the first number is 28, which is the second number?
 a) 69 b) 117 c) 61 d) 60
15. There are 5 cows, 2 buffaloes and one calf in a field. How many legs are there altogether?
 a) 32 b) 20 c) 28 d) 24
16. The shape of a ball is.....
 a) Sphere b) Circle c) Oval d) Round
17. The sum of first four odd numbers is.....
 a) 7 b) 10 c) 16 d) 5

18. If a ball represents 10 and a bat represents 25 runs, which of the following represents a century?

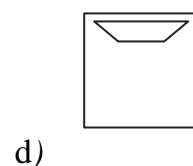
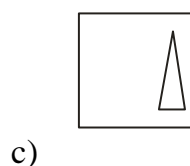
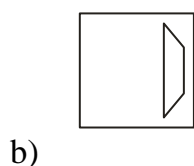
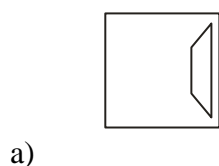


19. The cost of 5 boxes are Rs.45. what is the cost of one box?
 a) 5 b) 9 c) 15 d) 10
20. Write the correct order of the dates.
 A=02/06/2013 B=26/12/2011 C=08/02/2013
 a) BCA b) BAC c) BCB d) ABC
21. The person who reports news and writes for a news paper
 a) Cartoonist b) Journalist c) Goldsmith d) Novelist
22. Kerala Kalamandalam is situated at.....
 a) Shornur b) Tirur c) Cheruthuruthy d) Tirunelli
23. Who is the author of 'Nalukettu'?
 a) Kamala Surayya b) M.T.Vasudevan Nair
 c) Kesavadev d) O.V.Vijayan
24. Who is Kerala's present Minister for Agriculture?
 a) Ravindra Nath b) Sunil Kumar c) K.T.Jaleel d) P.K.Sreemathi
25. The freedom fighter popularly known as 'Punjab' Kesari'?'
 a) Annie Besant b) lala Lajpat Rai c) Sarojini Naidu d) Mangal Pandey
26. Capital of Bihar is.....
 a) Patna b) Raipur c) Port Blair d) Panaji
27. Oscar Award' is associated with.....
 a) Films b) Sports c) Music d) Literature

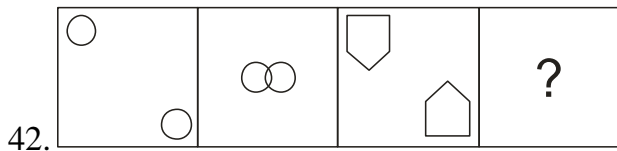
28. Which University newly started in Kerala that was inaugurated by the president of India?
 a) Cochin University b) Sanskrit University
 c) Malayalam University d) medical University
29. Kerala High Court is located in.....
 a) Ernakulam b) Thiruvananthapuram c) Thrissur d) Kozhikkode
30. The Malayalam film which won state award 2016 is.....
 a) Ennu Ninte Moideen b) Bahubali c) Ozhivu Divasathe Kali d) Charlie
31. Who is the leader of opposition in Kerala legislative assembly?
 a) Ramesh Chennithala b) Oommen Chandy c) K.Babu d) K.M.Mani
32. Which of the following vehicle is driven by the loco pilot?
 a) Aeroplane b) Train c) Bus d) Ship
33. Which state in India has the highest literacy rate?
 a) Tamilnadu b) Kerala c) Andra Pradesh d) None of these
34. What is the minimum age for competing in the Olympic games?
 a) 20 years b) 15 years c) 18 years d) 16 years
35. The first Malayalam film star to become Lok Sabha MP is.....
 a) K.B.Ganesh Kumar b) Innocent c) Mammooty d) Amitab bachan
36. Write the next number: 11, 12, 14, 17, 21,
 a) 23 b) 25 c) 27 d) 26
37. A class of boys stands in a single line. One boy is 21st in order from both the ends. How many boys are there in the class?
 a) 40 b) 41 c) 42 d) 43
38. What comes next?



?



39. Now the time is 11:30 what will be the time after 40 minutes?
 a) 12:00 b) 12:30 c) 12:10 d) 12:01
40. BD : CE :: NP :
 a) OQ b) OP c) MQ d) QR
41. Find out the letter common in HANBS, HEAD , HAIR and not in KNEA?
 a) I b) D c) H d) A



- a)
- b)
- c)
- d)

43. How many rounds does an hour hand complete in a day?

- a) 1 b) 2 c) 3 d) 4

44. 12 months make a year. Rohan is three and half years old. How many months old Rohan is?

- a) 40 months b) 6 months c) 36 months d) 42 months

45. Choose the missing number

10	6	13	11	25	7
	8		12		?

- a) 32 b) 16 c) 12 d) None of these

46. He is Honest man

- a) A b) the c) an d) of

47. Raveendran a flat in the city

- a) Has b) have c) was d) can

48. this book yours?

- a) Is b) are c) am d) were

49. Pick out the wrongly spelt word

- a) Brinjal b) Kingdom c) Recive d) Delicate

50. Meet me six O' clock

- a) On b) in c) at d) since

51. I like pudding my sister likes cake.

- a) but b) so c) Because d) for

52. Neeraj an orange yesterday

- a) eat b) eats c) eating d) ate

53. Which is a greeting?

- a) My mother is a teacher b) I could help you in all ways
c) I am glad to meet you d) You would better go by train

54. I saw a flock of

- a) people b) sheep c) pupils d) sheeps

55. Write the correct synonym for the underlined word

The old man is very tired

- a) Weak b) active c) strong d) energetic

56. Which kind of device is a keyboard
a) Block b) Input c) Output d) Storage
57. The parts of a computer which can be touched and seen are called.....
a) Hardware b) Software c) Data d) Operating system
58. How many scroll bars are there in MS Word
a) 1 b) 4 c) 3 d) 2
59. Find the odd one out
a) Keyboard b) Speaker c) MS Word d) Pen drive
60. Processed data is known as
a) Raw data b) Information c) Application d) None of these