

# MALAPPURAM SAHODAYA APTITUDE TEST

## MSAT FINAL ROUND 2015-16

Class: II

Date: 05.12.2015

Marks: 60

Reg. No.

Time : 2 Hrs

### General Instructions:

1. Candidate will be supplied with separate Question Paper and Answer Sheet.
2. Answer the questions in the OMR sheet by shading the appropriate bubble.
3. Shade the bubbles with black ball pen/ HB pencil.
4. Each question carries one mark.
5. For each question below, four options are given. One of them is correct answer. Make your choice and shade the correct box.

1. \_\_\_\_\_ + 6 = 86

- a) 8                      b) 6                      c) 80                      d) 60

2. \_\_\_\_\_ days are there in a leap year.

- a) 366                      b) 365                      c) 364                      d) 360

3. Which of the following is the largest two digit even number?

- a) 99                      b) 90                      c) 10                      d) 98

4. Four small glasses will fill one big glass. \_\_\_\_\_ small glasses will fill half the big glass.

- a) 2                      b) 1                      c) 3                      d) 4

5. If Aruna buys 5 pairs of ear rings, then how many ear rings are there?

- a) 5                      b) 10                      c) 15                      d) 60

6. Half kilogram = \_\_\_\_\_ grams.

- a) 50 g                      b) 500 kg                      c) 500 g                      d) 100g

7. Total number of days in July and August

- a) 62                      b) 61                      c) 60                      d) 58

8. Which day will come after Wednesday?

- a) Tuesday                      b) Monday                      c) Thursday                      d) Friday

9.  $32 - \underline{\hspace{2cm}} = 5$

- a) 27                      b) 28                      c) 29                      d) 30



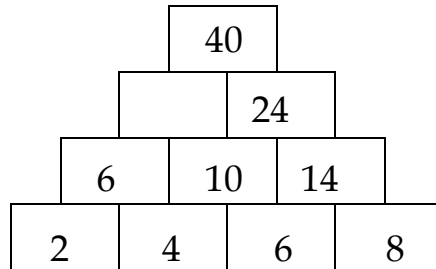
18. If 86345 = CLOUD, 532 = DOG, find the word for the code 2365.

- a) GOLD      b) COLD      c) FOLD      d) GLAD

19. If the number code of DIG = 497 and BED = 254, find out the code of 'BAD'.

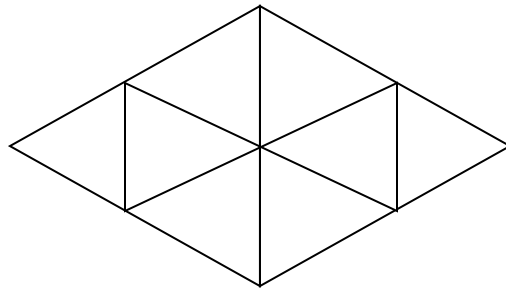
- a) 215      b) 214      c) 142      d) 125

20. Complete the number pyramid.



- a) 15      b) 17      c) 16      d) 18

21. Count the triangles in this figure.



- a) 10      b) 8      c) 4      d) 12

22.  $14 + 16 - 8 =$  \_\_\_\_\_

- a) 38      b) 30      c) 24      d) 22

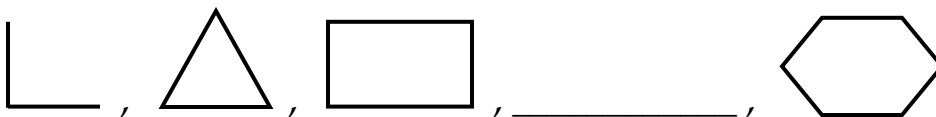
23. If  $A=9$ ,  $B=10$ , then  $2 + B - A =$  \_\_\_\_\_

- a) 3      b) 4      c) 19      d) 21

24. Which of the following is the largest number?

- a) 234      b) 432      c) 324      d) 342

25. Choose the missing figure:



- a)       b)       c)       d) 



37. Who was the first Chief Minister of Kerala?

- a) Oommen Chandi
- b) E.M.S. Nambuthirippad
- c) K. Karunakaran
- d) R. Sankar

38. Capital of Bihar is \_\_\_\_\_

- a) Lucknow
- b) Thiruvananthapuram
- c) Patna
- d) Dispur

39. \_\_\_\_\_ is the head of a Panchayath.

- a) Member
- b) Mayor
- c) President
- d) Clerk

40. Present Prime Minister of India.

- a) Manmohan Singh
- b) A.B.Vajpayee
- c) Narendra Modi
- d) Rajnath Singh

41. Odd one out.

- a) January 26
- b) August 15
- c) October 2
- d) September 4

42. The longest river in India.

- a) Ganga
- b) Brahmaputra
- c) Godavari
- d) Periyar

43. When Jawaharlal Nehru was born?

- a) 2<sup>nd</sup> November 1889
- b) 4<sup>th</sup> November 1889
- c) 15<sup>th</sup> November 1889
- d) 14<sup>th</sup> November 1889

44. Where is Kerala Kalamandalam situated?

- a) Malappuram
- b) Wayanad
- c) Kozhikkode
- d) Thrissur

45. First newspaper in Kerala

- a) Deepika
- b) Rajya Samacharam
- c) Mathrubhumi
- d) Malayala Manorama

46. Which part of a computer displays the output?

- a) Monitor
- b) CPU
- c) Keyboard
- d) Scanner

47. The data and instructions are together known as \_\_\_\_\_

- a) Output
- b) Input
- c) Process
- d) Program

48. Which part of a computer process data?

- a) Monitor      b) CPU      c) Keyboard      d) Mouse

49. Desk top hold many small pictures known as \_\_\_\_\_

- a) Program      b) Icons      c) Wordpad      d) Notepad

50. Which button do we click first to shut down a computer?

- a) Title bar      b) Minimize button      c) Start button      d) Tool bar

51. There is snowfall during the \_\_\_\_\_ season.

- a) Summer      b) Winter      c) Rainy      d) Spring

52. Which is the last formed state in India?

- a) Kerala      b) Tamilnadu      c) Odisha      d) Telungana

53. Capital city of Maharashtra

- a) Mumbai      b) Chennai      c) Shillong      d) Madurai

54. Total number of bones in our body

- a) 208      b) 206      c) 202      d) 204

55. The organ, which pumps blood to all parts of our body

- a) Heart      b) Brain      c) Chest      d) Head

56. Odd one out.

**Love,      Neatness,      Cruelty,      Punctuality**

- a) Love      b) Neatness      c) Punctuality      d) Cruelty

57. The largest bird in the world

- a) Ostrich      b) Eagle      c) Duck      d) Peacock

58. Ginger is \_\_\_\_\_ of a plant.

- a) Root      b) Leaf      c) Fruit      d) Stem

59. Festival of light

- a) Idul Fitr      b) Onam      c) Diwali      d) Dasara

60. The sun has \_\_\_\_\_ planets.

- a) 6      b) 7      c) 10      d) 8

**MALAPPURAM SAHODAYA APTITUDE TEST**  
**MSAT FINAL ROUND 2015-16**

Answer Key

Class: II

1.C	16.A	31.A	46.A
2.A	17.B	32.B	47.B
3.D	18.A	33.C	48.B
4.A	19.B	34.A	49.B
5.B	20.C	35.A	50.C
6.C	21.A	36.A	51.B
7.A	22.D	37.B	52.D
8.C	23.A	38.C	53.A
9.A	24.B	39.C	54.B
10.B	25.C	40.C	55.A
11.A	26.C	41.D	56.D
12.B	27.A	42.A	57.A
13.D	28.B	43.D	58.D
14.A	29.C	44.D	59.C
15.B	30.D	45.B	60.D