

**MALAPPURAM SAHODAYA APTITUDE TEST
EXAMINATION 2016-17**

Class: 4

Date:


Marks : 60

Reg. No.

Time : 2 Hrs

General Instructions:

1. Candidate will be supplied with separate Question Paper and Answer Sheet.
2. Answer the questions in the OMR sheet by shading the appropriate bubble.
3. Shade the bubbles with black ball pen/HB pencil.
4. Each question carries one mark.
5. For each question below, four options are given. One of them is correct answer. Make your choice and shade the correct box.

1. In India, National Sport Day is
a) August 19 b) August 29 c) September 19 d) September 29
2. Which is the biggest First in Kerala?
a) St. Angelo Fort b) Beccal Fort c) Palakkad Fort d) kannur Fort
3. The Pink City Jaipur is the Capital of which state?
a) Rajasthan b) Bihar c) Madhaya Pradesh d) Orissa
4. The father of Malayalam language
a) Ezhuthachan b) Cherussery c) Ulloor d) Vallathol
5. Who is the chancellor of University?
a) Governor b) Lecturer c) Minster d) Teacher
6. October 2 is celebrated as.....
a) World water day b) World Forest Day
c) World Peace day d) World Non-Violence Day
7. This logo belongs to 
a) Canara Bank b) Milma c) KSFE d) State Bank of India
8. The first Muslim Juma Masjid in Kerala
a) Ponnani Masjid b) Cheraman Juma Masjid
c) Mishkal Masjid d) None of these
9. "Randamoozham" is a Malayalam Novel Written by.....
a) Vaikom Mohammed Basheer b) Thakazhi
c) M.T. Vasudevan Nair d) O.V. Vijayan
10. What is the full form of RBI?
a) Reserve Bank of India b) Rural Bank of India
c) Rapid Development Force d) None of these

26. My teacher time with children
 a) Spends b) to spend c) spending d) spending
27. Which is the most humble request among the following?
 a) Give me some water b) will you give me some water?
 c) Would you give me some water d) can you give me some water?
28. I a letter now
 a) Have written b) am writing c) write d) writes
29. A of crows have been troubling people in this place for an hour.
 a) Group b) pride c) flock d) murder
30. They were married
 a) Happy b) happily c) happiness d) unhappy
31. He is very good Maths
 a) On b) at c) with d) in
32. books are these?
 a) Whose b) who's c) who d) whos
33. I Swim across the river when I was young
 a) can b) may c) could d) will
34. You wear the chappals here. The notice says "Chappals Out".
 a) Can b) Can't c) did not d) should
35. Whos is, you or Midhun?
 a) Taller than b) more taller c) the taller d) taller
36. Which part comes at first from the seed?
 a) Stem b) root c) leaves d) flower
37. The members in a Kabaddi team are
 a) 8 b) 6 c) 7 d) 9
38. Which flower do we use for making medicine?
 a) Jasmine b) Basil c) Lotus d) Magnolis
39. Among the following, which animal lays eggs?
 a) Rat b) Pig c) Rabbit d) Frog
40. The Khejadi tree is found mainly in
 a) Forest area b) Mountains c) Desert areas d) Fields
41. The heart of a normal healthy person beats ties in a minute.
 a) 62 b) 72 c) 76 d) 82
42. The young one of a whale is called
 a) Calf b) fawn c) cub d) kitten
43. Which among the following sinks in the water?
 a) Wooden boat b) Needle c) Iron ship d) Plastic bottle
44. Select the smallest seed
 a) Mango seed b) Apple seed c) Orange seed d) Cumin seed

45. A special kind of vehicle used in Gujrath.

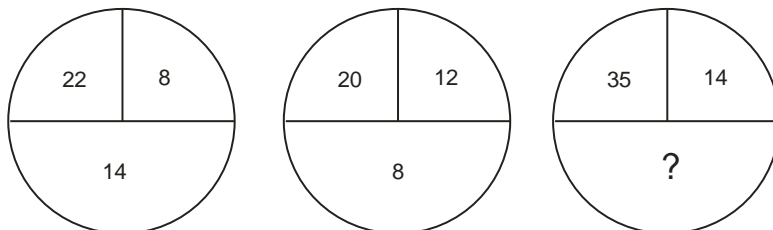
- a) Jugad b) Vallam c) Camel cart d) Trolly

46. Find out the next 2 terms in the series

B, D, G, K,,

- a) Q,U b) P, U c) P, V d) Q, V

47. Find the missing number



- a)21 b) 20 c) 22 d)23

48. If ABCD is coded as 1234, what would GHIF stands for?

- a) 7869 b) 7896 c) 5678 d) 6789

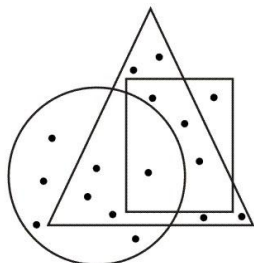
49. $\Delta + O = 7$, $O - \Delta = 1$ if these number sentences are true, which of the following may be correct?

- a) $\Delta = 4$ $O = 3$ b) $\Delta = 3$ $O = 4$ c) $\Delta = 6$ $O = 1$ d) $\Delta = 5$ $O = 2$

50. If 5 cats can kill 5 rates in 5 minutes, how long will it take for 100 cats to kill 100 rats?

- a) 5 minutes b) 100 minutes c) 10 minutes d) 110 minutes

51.



In this figure, how many dots are common in the square and triangle but not in the circle?

- a) 5 b) 7 c) 8 d) 3

52. 35Z, 38Y, 41X,

- a) 44 V b) 43V c) 44W d) 43W

53. Write the next number.

10, 101, 1010,

- a) 10101 b)100 c) 101 d) 1000

54. 51, 63,, 87, 99

- a) 74 b) 75 c) 76 d) 79

55. Which does not belong to the group?

- a) $\frac{36}{2}$ b) 9×2 c) $10 + 9$ d) $30 - 12$

56. is regarded as the founder of world wide web
a) Sabeer Bhatia b) Tim Berners – Lee c) Sergey Brin d) Charlse Babbage
57. The shortcut key for universal Help is
a) F1 b) F3 C) F2 d) F4
58. CD stands for
a) Common Disk b) Computer Disk c) Complete Disk d) Compact Dist
59. memory is also called primary or main memory
a) External b) Secondary c) Internal d) Auxiliary
60. Which device gives the output onto paper
a) printer b) monitor c) speaker d) microphone